

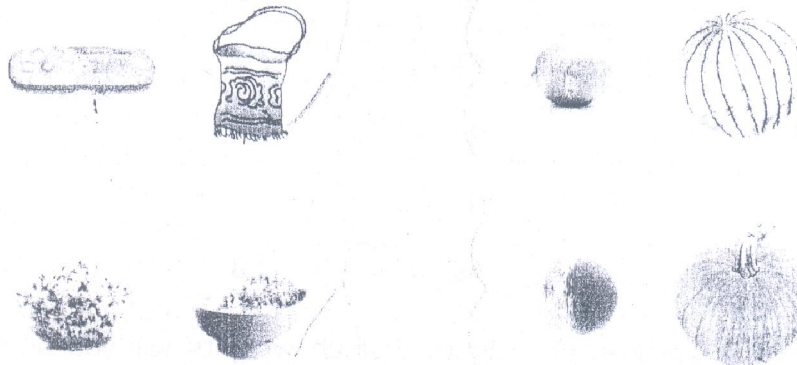
### 8. Which is Heavier?

class - III

Name \_\_\_\_\_


Roll. \_\_\_\_\_ DE \_\_\_\_\_

Tick the objects that will weigh more



Fill in grams (g) or kilograms (kg)

1. A spoon of sugar =
2. 5 uncle chips =
3. 10 bananas =
4. A dozen apples =
5. A sweet =
6. A sack of wheat =
7. A bunch of grapes =
8. A pencil =
9. A table =
10. A bed =



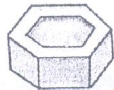
### Now Solve These!

1. 1 kg =   g
2. 7000 g =   kg
3. 9643 g =   kg  g
4. 6 kg 150 g =   g
5. 23 kg =   g
6. 8132 g =   kg  g

Given below are pictures of weights. Which weights will you use to weigh the objects given below?



5 Kg



2 Kg



1 Kg



500g




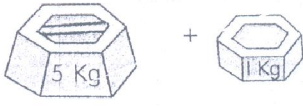



200 g



100 g



50 g

Things	Weights used
6 kg rice 	
half a kg tomatoes 	
3½ kg onions 	
350 g sugar 	
1 kg 600 g of dal 