

KENDRIYA VIDYALAYA KHURDA ROAD
CLASS II / EVS / CCE-2 / (2011-2012)

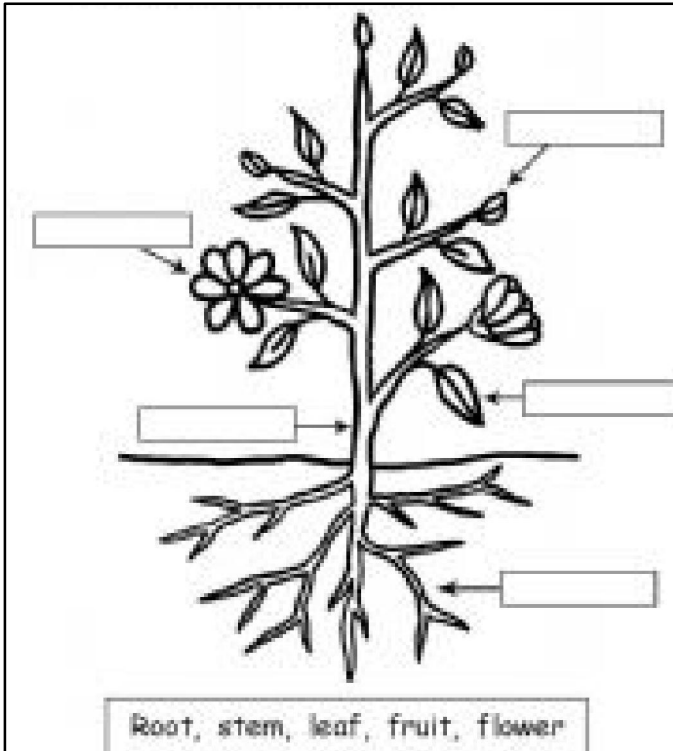
Name-----Sec----- Roll no. ----- Date-----

OBS	ID	DF	GA
-----	----	----	----

Sign of Invigilator

OBSERVATION:-

Q1. Name the parts of a plant.



Q2. Match the following:-

- | | |
|----------|------------|
| Tree | China rose |
| Shrub | Banyan |
| Herb | Grape vine |
| Climbers | Pumpkin |
| Creepers | Tulsi |


Q3. What does a plant need to grow? (IDENTIFICATION)

Ans. _____
_____.

Q4. Give two examples of each of the following:-


- a) Fruits ----- ,-----
- b) Vegetables----- ,-----
- c) Cereals ----- ,-----
- d) Pulses----- ,-----

Q5. Observe the pictures and name the animals.(DF)




Q6 Fill in the blanks :- (tree, den, hole, burrow, water)

a) Fish lives in _____



b) Lion lives in _____



c) Snake lives in _____



d) Rabbit lives in _____



e) Monkeys live in _____



(GA)

Q7 Q4. Give two examples of each of the following:-

a) Pet animals-----, -----

b) Wild animals-----, -----

c) Water animals -----, -----

d) Birds -----, -----

e) Insects -----, -----