


UBC

Q5. Tick the objects (✓) that is long and (x) the objects that are round.



Q6. Tick the objects (✓) that can roll tick the objects (x) that can slide.



Q5. Encircle the objects that can both roll and slide.

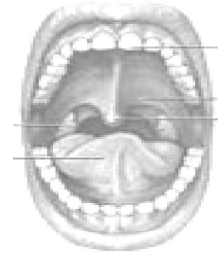


AC

1. Ring the correct answer.

Number of teeth in your mouth:-

- a) More than 40 b) Less than 40



2. Number of English book in your class

- a) More than 40 b) Less than 40



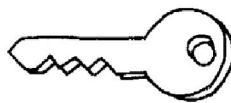
3. Guess the number of tiles on the floor.

◇	◇	◇	◇			◇	◇	◇	◇
◇	◇	◇					◇	◇	◇
◇	◇							◇	◇
◇									◇
◇									◇
◇	◇							◇	◇
◇	◇	◇					◇	◇	◇
◇	◇	◇	◇			◇	◇	◇	◇

Add more tiles to make it 50.

How many tiles you added?

Q4. Draw a line to match the heavier one.



Q5. Draw a line to match the lighter one.



PSA

Q1.



Chunu



Munu



Kunu



Gonu



Sonu

a) How many chickens are in line? Ans. _____

b) Kunu is _____ in the line.

c) Put a circle around the 2nd chicken.

d) What is the name of the fifth chicken. Ans. _____

Q2. Gita purchased 43 roses from the market to make garland. She used 10 flowers to make 1 garland.

a) How many garlands did she make?

Ans. She made _____ garlands

b) How many flowers are left?

Ans. _____

Q3. Draw 10 bindis in three different ways.

